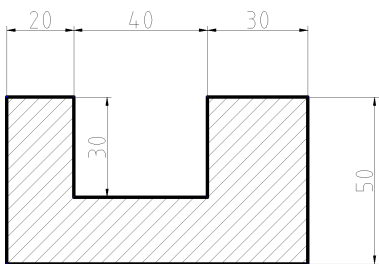
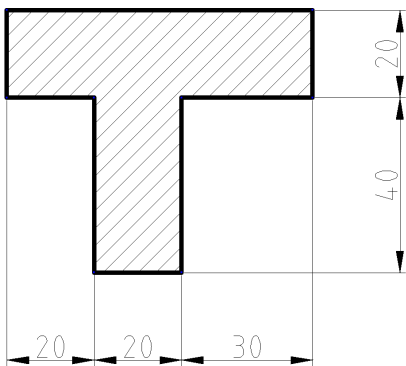


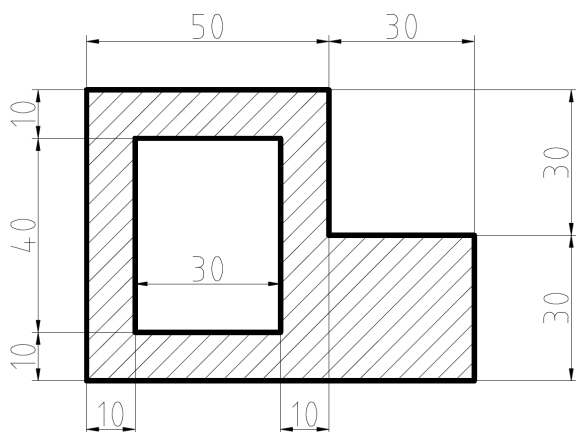
Calcule o centro de massa das figuras abaixo:



R.: (46,8 , 21,4) com origem no canto inferior esquerdo



R.: (33,2 , 20,9) a partir do canto superior esquerdo



R.: (38,5 , 25) a partir do canto inferior esquerdo